









Compare and group solids, liquids and gases

Label the objects below as a solid, liquid or gas.

Object	Picture	Solid	Liquid	Gas
brick wall				
water				
ice cubes				
plastic bottle				
steam				
eraser				
sky				
oil				

Challenge:
Draw how the particles are arranged in a solid, liquid, and gas.

Stretch:
Write down three properties of solids, liquids, and gases.



Compare and group solids, liquids and gases

Chose eight different items, state if it is a solid, liquid or gas, and then explain why. Try not to use the same explanation each time.

Material	Solid, Liquid or Gas	Explanation